


# Støddfrøði

45 minuttir



Navn :	Flokkur :	Nr. :
Skúli :	Lærari :	

Svarini verða skrivað á uppgávuarkið. Um það er ein uppgáfa, sum tú ikki dugir, far so víðari. Tú kanst skriva við blýanti.

1.

*Kladda*

a)  $6 + 3 =$  \_\_\_\_\_ b)  $13 + 15 =$  \_\_\_\_\_

c)  $9 - 4 =$  \_\_\_\_\_ d)  $47 - 14 =$  \_\_\_\_\_

2.

Hvussu nógv kosta allar fruktirnar ?

3 kr.

5 kr.

4 kr.

17 kr.

\_\_\_\_\_ kr.

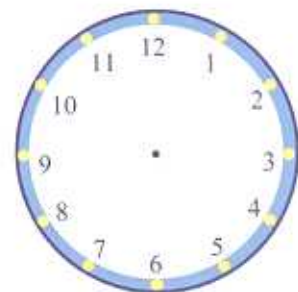
3.

a) Hvat er klokkan nú? \_\_\_\_\_



Ása skal spæla hondbólt hálvgrum sjeý

b) Tekna stóra og líttla pinn.



4. Set ring um minsta talið :

340	391	380	198	240
-----	-----	-----	-----	-----

5. Set rætta talið í

*Kladda*

a)  $9 + \square = 16$

b)  $15 - \square = 7$

c)  $\square \square : 6 = 6$

d)  $\square \cdot \square = 28$

6. Set eitt av teknunum  $<$ ,  $=$  ella  $>$ , so at útsøgnin verður sonn :

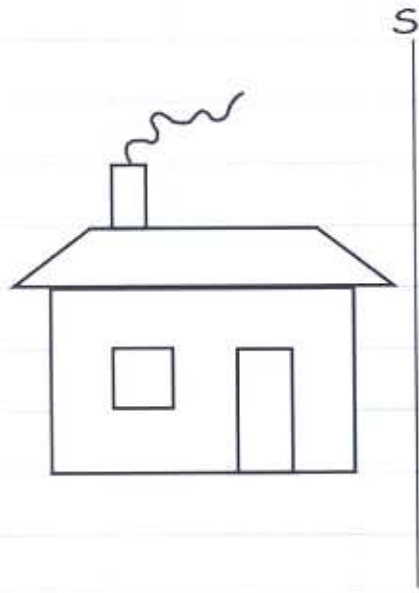
a)  $4 \cdot 17 \square 3 \cdot 17$

b)  $4 \cdot 7 \square 7 \cdot 4$

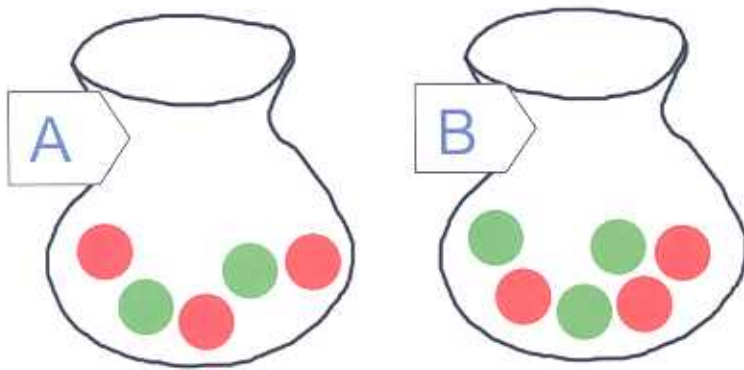
c)  $3 \cdot 8 \square 4 \cdot 6$

7.

Spegla um S



8.



Úr hvørji krukku er kjansurin størri at taka eina reyða kúlu? \_\_\_\_\_

9. Rokna :

*Kladda*

a)  $7 \cdot 8 =$  \_\_\_\_\_

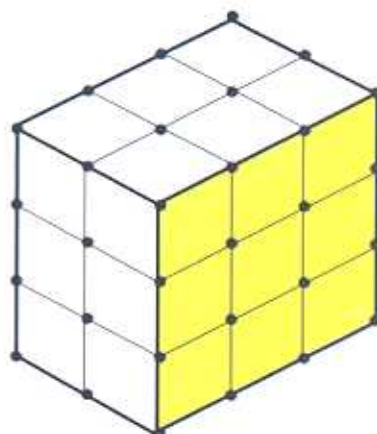
b)  $4 \cdot 12 =$  \_\_\_\_\_

c)  $13 \cdot 5 =$  \_\_\_\_\_

10.

Rúmdin á skapinum er :


\_\_\_\_\_



11. Máta :



a) Longd = \_\_\_\_\_ cm



b) Vinkul A = \_\_\_\_\_ °

12. Skriva S um útsögnin er sonn, og skriva Ó um útsögnin er ósonn :

a)  $6 \cdot 8 = 4 \cdot 12$   *Kladda*

b)  $8 + 4 > 6 + 6$

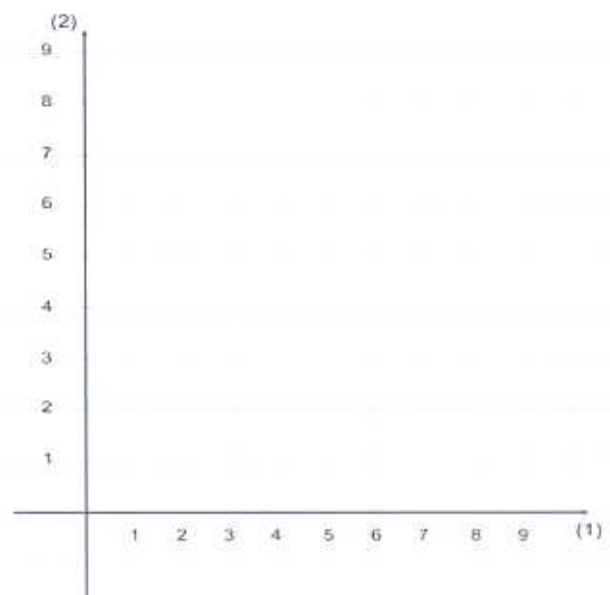
c)  $4\frac{1}{2} > 4$

13.

a) Tekna fýrkant ABCD

$A = (2, 3)$        $B = (8, 3)$

$C = (8, 8)$        $D = (2, 8)$



b) Ummálið er:

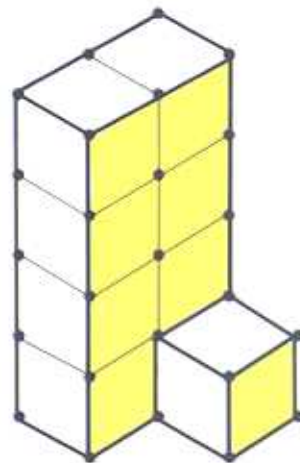
\_\_\_\_\_ eindir

c) Viddin á ABCD er:

\_\_\_\_\_ deildir

14.

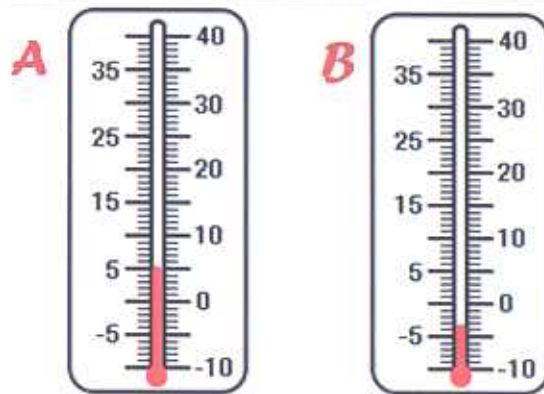
Rúmdin á skapinum er : \_\_\_\_\_



15.

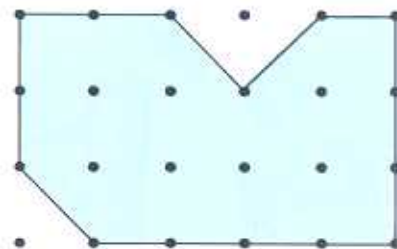
Hvussu nógv vísir hitamátarin

A meira enn B? \_\_\_\_\_ "



16.

Viddin er : \_\_\_\_\_



17.

Brot

Lita brotið

Dømi

$\frac{1}{3}$

=



a)

$\frac{1}{4}$

=



b)

$\frac{3}{5}$

=



c) Skriva brotið sum passar til



\_\_\_\_\_

18.

10 kr/stk



Hvussu nógv kosta allar vøurnar ?

\_\_\_\_\_ kr.



*Kladda*

19. Rokna :

*Kladda*

a)  $326 + 67 =$  \_\_\_\_\_

b)  $54 - 28 =$  \_\_\_\_\_

c)  $7358 + 495 =$  \_\_\_\_\_

20. Loys líkningarnar :

a)  $3 \cdot x + 2 = 11$

b)  $\frac{x}{3} - 3 = 0$

c)  $x \cdot x \cdot x = 27$

$x =$  \_\_\_\_\_

$x =$  \_\_\_\_\_

$x =$  \_\_\_\_\_

